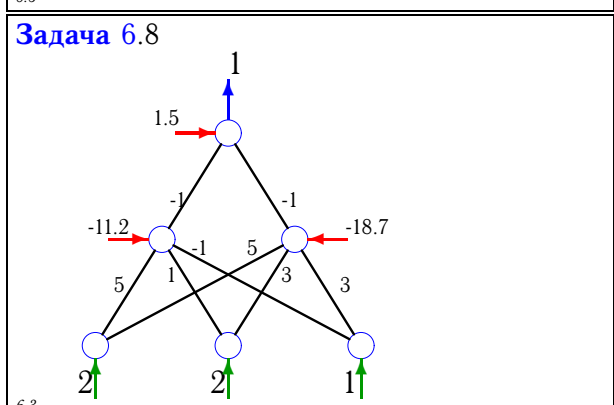
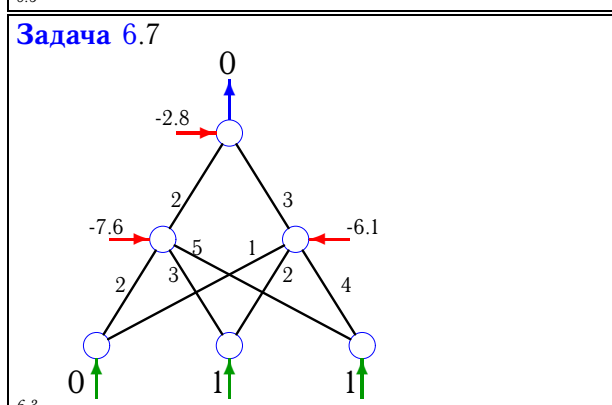
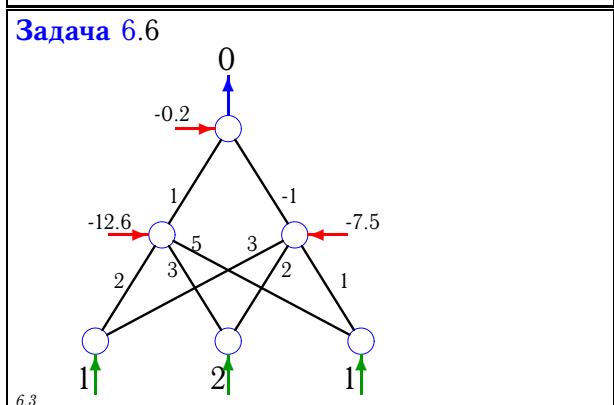
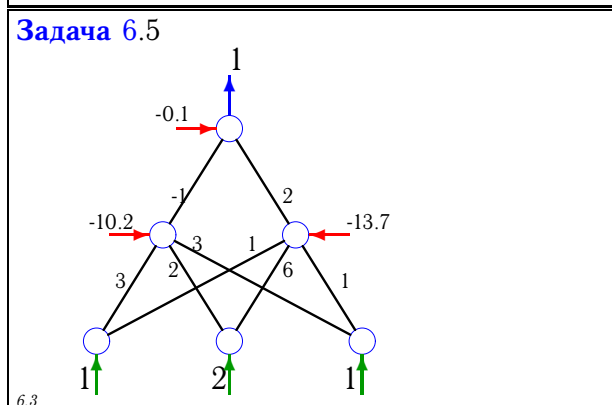
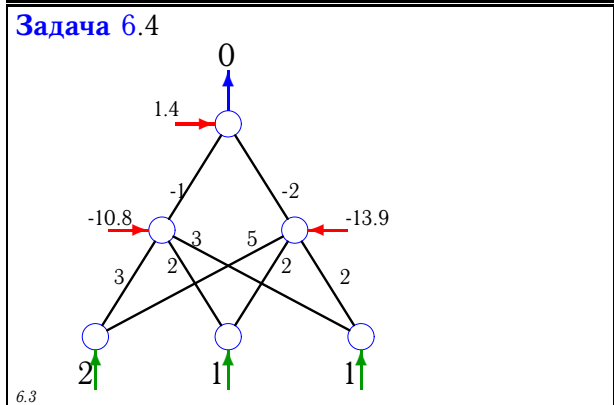
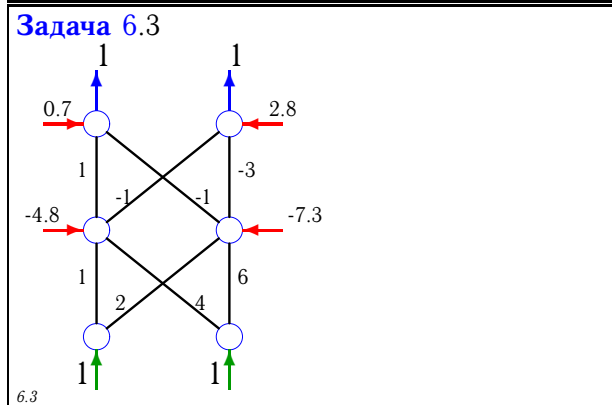
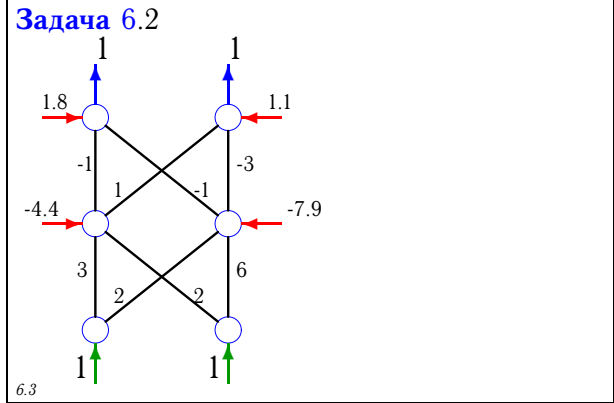
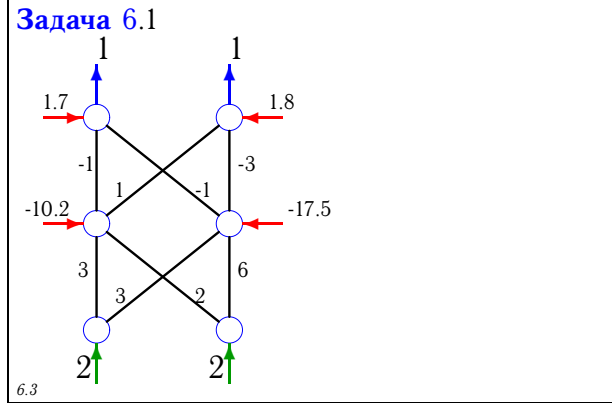
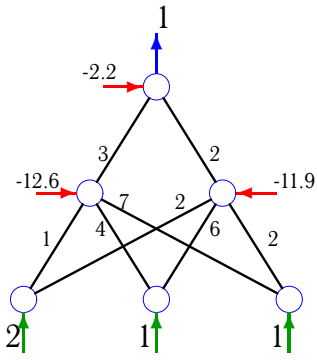


Двухслойный персептрон

Найти среднеквадратичные ошибки сети.

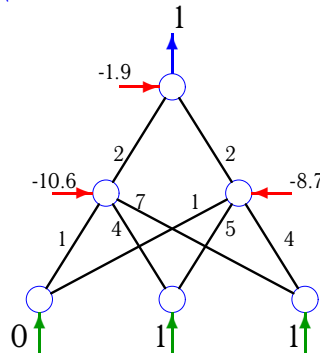


Задача 6.9



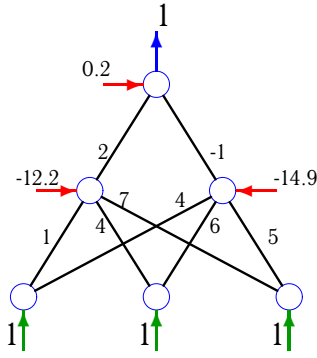
6.3

Задача 6.10



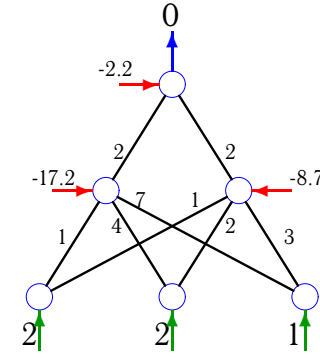
6.3

Задача 6.11



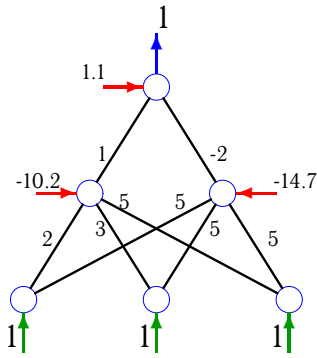
6.3

Задача 6.12



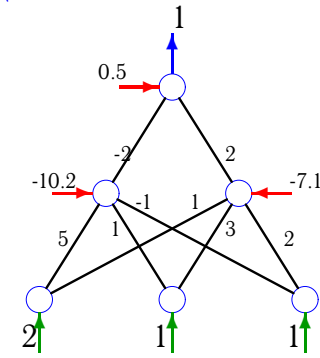
6.3

Задача 6.13



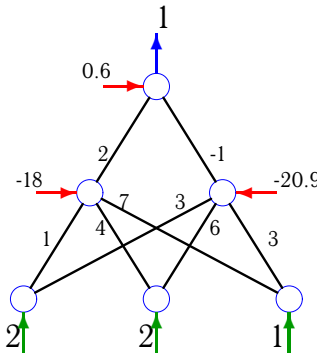
6.3

Задача 6.14



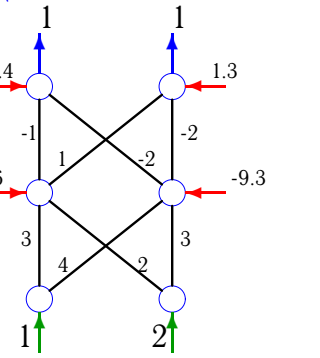
6.3

Задача 6.15



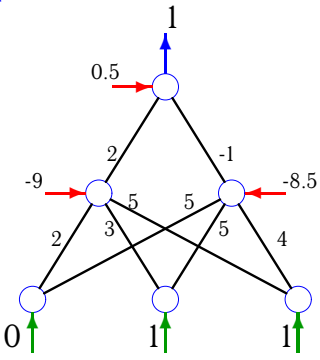
6.3

Задача 6.16



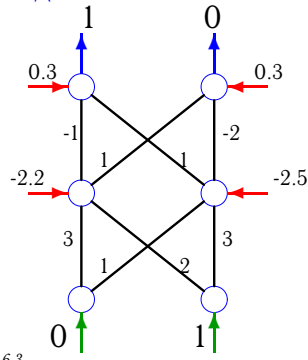
6.3

Задача 6.17



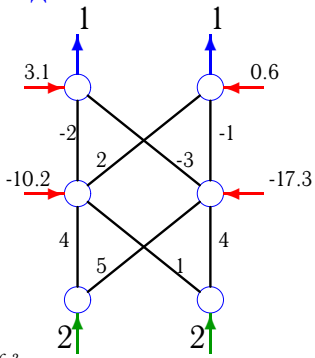
6.3

Задача 6.18



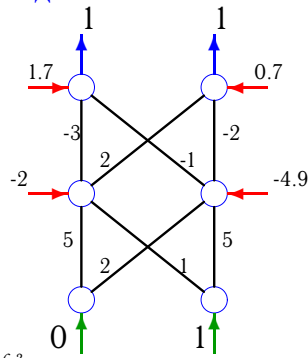
6.3

Задача 6.19



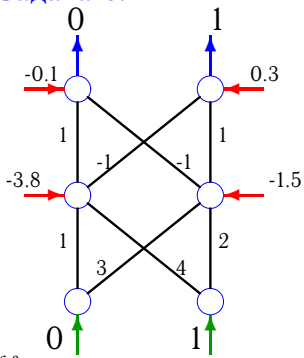
6.3

Задача 6.20



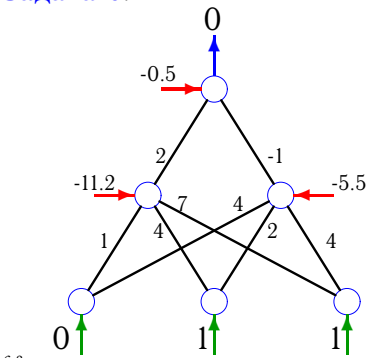
6.3

Задача 6.21



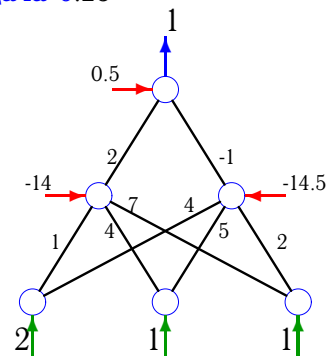
6.3

Задача 6.22



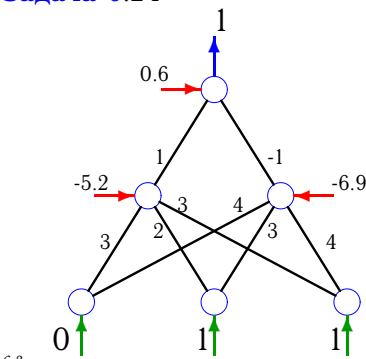
6.3

Задача 6.23



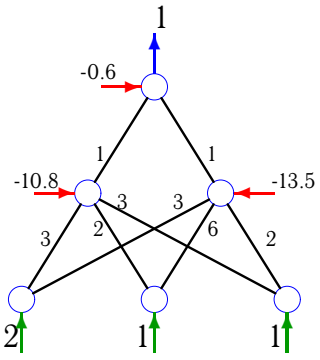
6.3

Задача 6.24



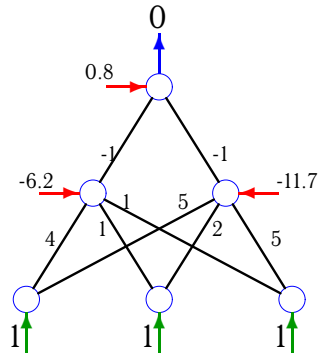
6.3

Задача 6.25



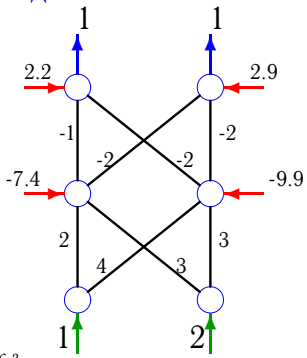
6.3

Задача 6.26



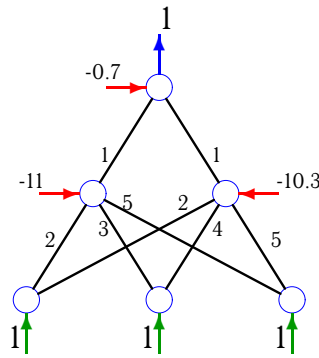
6.3

Задача 6.27



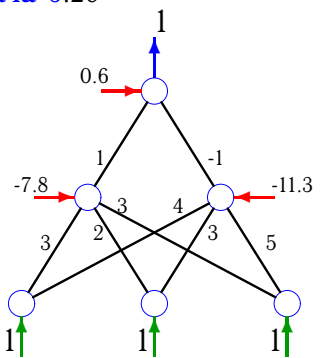
6.3

Задача 6.28



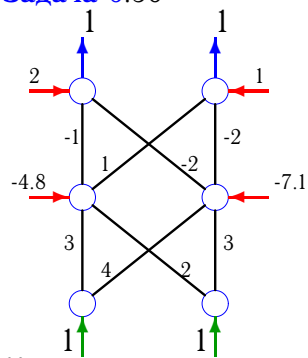
6.3

Задача 6.29



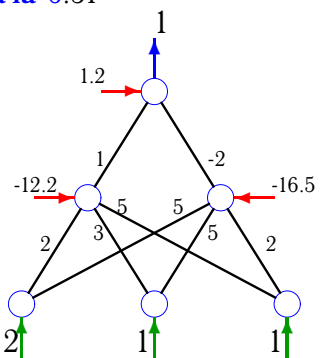
6.3

Задача 6.30



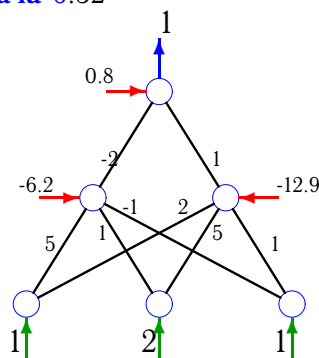
6.3

Задача 6.31



6.3

Задача 6.32



6.3

Двухслойный персептрон

1	0.0606	0.0822
2	0.0604	0.1046
3	0.0643	0.0963
4	0.1013	-
5	0.0629	-
6	0.0987	-
7	0.1038	-
8	0.0735	-
9	0.0591	-
10	0.0761	-
11	0.0648	-
12	0.1069	-
13	0.0804	-
14	0.0670	-
15	0.0617	-
16	0.0744	0.0659
17	0.0790	-
18	0.0738	0.0717
19	0.1019	0.0460
20	0.0836	0.1027
21	0.1044	0.0832
22	0.0989	-
23	0.0790	-
24	0.0691	-
25	0.0651	-
26	0.0986	-
27	0.0709	0.0662
28	0.0972	-
29	0.0729	-
30	0.0713	0.0628
31	0.0800	-
32	0.0782	-