

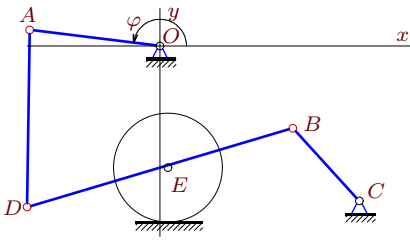
## Кинематический анализ плоского механизма (2)

Механизм изображен в произвольном положении, определяемом некоторым углом  $\varphi$ . Задана угловая скорость одного из звеньев или скорость центра диска. Длины звеньев даны в сантиметрах, радиус диска равен 5 см. Заданы координаты шарнира  $C$  и ордината оси диска в осях с началом в шарнире  $O$ . Диск катится без проскальзывания. Найти угловые скорости всех звеньев механизма и скорость центра диска (если она не задана) при  $\varphi = \varphi_0$ .

Кирсанов М.Н. **Решебник. Теоретическая механика**/Под ред. А. И. Кириллова.– М.: ФИЗМАТЛИТ, 2008. – 384 с. (с.158.)

### Задача 27.1.

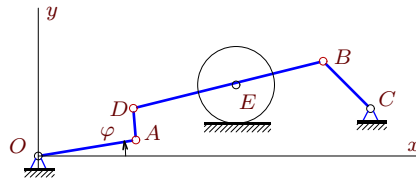
3



$$\omega_{BCz} = 16 \text{ рад/с}, BC=10, DE = BE = 13, OA = 12, AD = 16, x_C = 18, y_C = -14, y_E = -11, \varphi_0 = \pi.$$

### Задача 27.2.

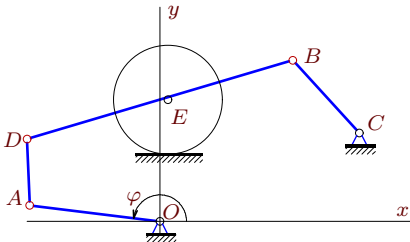
3



$$v_{Ex} = -42 \text{ см/с}, BC=10, DE = BE = 13, OA = 12, AD = 4, x_C = 42, y_C = 6, y_E = 9, \varphi_0 = 0.$$

### Задача 27.3.

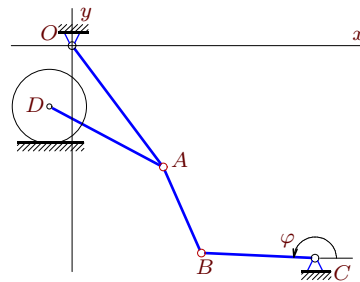
3



$$\omega_{OA_z} = -3 \text{ рад/с}, BC=10, DE = BE = 13, OA = 12, AD = 6, x_C = 18, y_C = 8, y_E = 11, \varphi_0 = \pi.$$

### Задача 27.4.

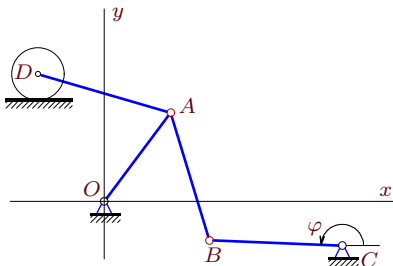
3



$$\omega_{BCz} = 16 \text{ рад/с}, OA = 20, AB = 13, BC = 15, AD = 17, x_C = 32, y_C = -28, y_D = -8, \varphi_0 = \pi.$$

### Задача 27.5.

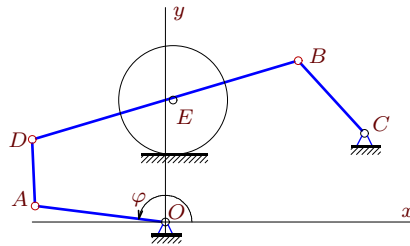
3



$$\omega_{OA_z} = -36 \text{ рад/с}, OA = 20, AB = 25, BC = 24, AD = 25, x_C = 43, y_C = -8, y_D = 23, \varphi_0 = \pi.$$

### Задача 27.6.

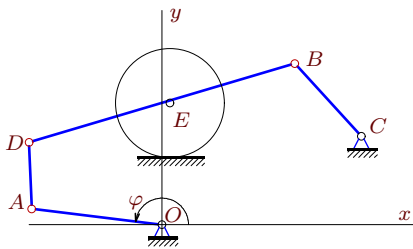
3



$$\omega_{OA_z} = -3 \text{ рад/с}, BC=10, DE = BE = 13, OA = 12, AD = 6, x_C = 18, y_C = 8, y_E = 11, \varphi_0 = \pi.$$

**Задача 27.7.**

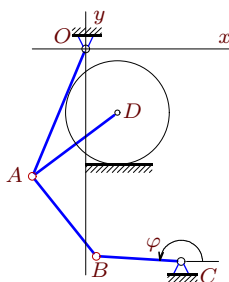
3



$\omega_{OA_z} = -3$  рад/с,  $BC=10$ ,  
 $DE = BE = 13$ ,  $OA = 12$ ,  
 $AD = 6$ ,  $x_C = 18$ ,  $y_C = 8$ ,  
 $y_E = 11$ ,  $\varphi_0 = \pi$ .

**Задача 27.8.**

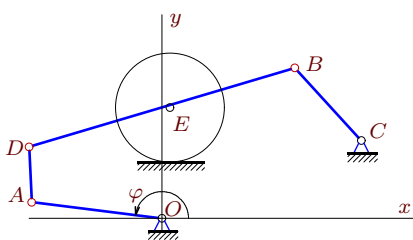
3



$\omega_{BC_z} = 14$  рад/с,  $OA = 13$ ,  
 $AB = 10$ ,  $BC = 8$ ,  $AD = 10$ ,  
 $x_C = 9$ ,  $y_C = -20$ ,  $y_D = -6$ ,  
 $\varphi_0 = \pi$ .

**Задача 27.9.**

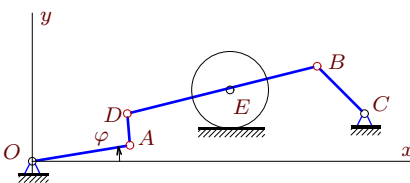
3



$\omega_{OA_z} = -5$  рад/с,  $BC=10$ ,  
 $DE = BE = 13$ ,  $OA = 12$ ,  
 $AD = 5$ ,  $x_C = 18$ ,  $y_C = 7$ ,  
 $y_E = 10$ ,  $\varphi_0 = \pi$ .

**Задача 27.10.**

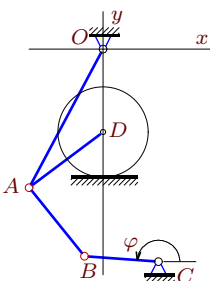
3



$\omega_{OA_z} = 2$  рад/с,  $BC=10$ ,  
 $DE = BE = 13$ ,  $OA = 12$ ,  
 $AD = 4$ ,  $x_C = 42$ ,  $y_C = 6$ ,  
 $y_E = 9$ ,  $\varphi_0 = 0$ .

**Задача 27.11.**

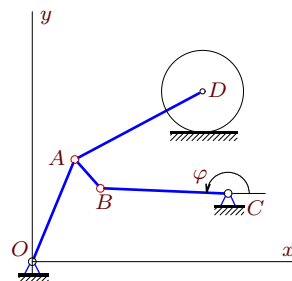
3



$\omega_{OA_z} = 32$  рад/с,  $OA = 17$ ,  
 $AB = 10$ ,  $BC = 8$ ,  $AD = 10$ ,  
 $x_C = 6$ ,  $y_C = -23$ ,  $y_D = -9$ ,  
 $\varphi_0 = \pi$ .

**Задача 27.12.**

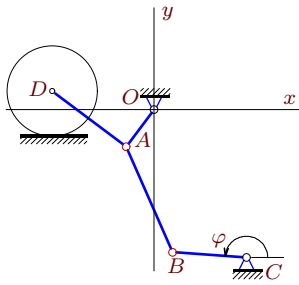
3



$\omega_{BC_z} = -14$  рад/с,  $OA = 13$ ,  
 $AB = 5$ ,  $BC = 15$ ,  $AD = 17$ ,  
 $x_C = 23$ ,  $y_C = 8$ ,  $y_D = 20$ ,  
 $\varphi_0 = \pi$ .

**Задача 27.13.**

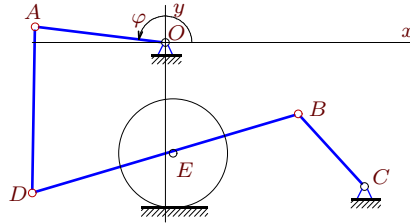
3



$\omega_{OA_z} = -24$  рад/с,  $OA = 5$ ,  
 $AB = 13$ ,  $BC = 8$ ,  $AD = 10$ ,  
 $x_C = 10$ ,  $y_C = -16$ ,  $y_D = 2$ ,  
 $\varphi_0 = \pi$ .

**Задача 27.14.**

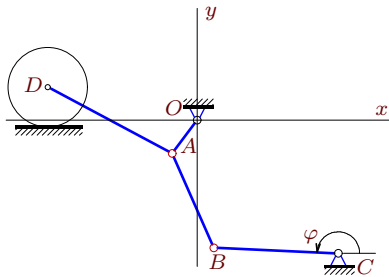
3



$\omega_{BC_z} = 30$  рад/с,  $BC=10$ ,  
 $DE = BE = 13$ ,  $OA = 12$ ,  
 $AD = 15$ ,  $x_C = 18$ ,  $y_C = -13$ ,  
 $y_E = -10$ ,  $\varphi_0 = \pi$ .

**Задача 27.15.**

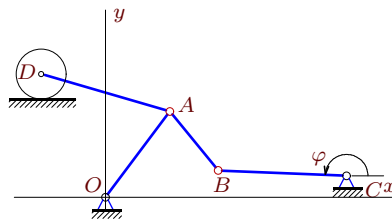
3



$\omega_{BC_z} = -14$  рад/с,  $OA = 5$ ,  
 $AB = 13$ ,  $BC = 15$ ,  $AD = 17$ ,  
 $x_C = 17$ ,  $y_C = -16$ ,  $y_D = 4$ ,  
 $\varphi_0 = \pi$ .

**Задача 27.16.**

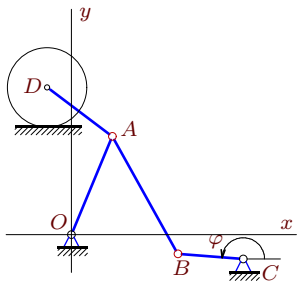
3



$\omega_{OA_z} = -6$  рад/с,  $OA = 20$ ,  
 $AB = 15$ ,  $BC = 24$ ,  $AD = 25$ ,  
 $x_C = 45$ ,  $y_C = 4$ ,  $y_D = 23$ ,  
 $\varphi_0 = \pi$ .

**Задача 27.17.**

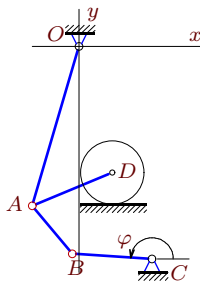
3



$\omega_{BC_z} = 57$  рад/с,  $OA = 13$ ,  
 $AB = 17$ ,  $BC = 8$ ,  $AD = 10$ ,  
 $x_C = 21$ ,  $y_C = -3$ ,  $y_D = 18$ ,  
 $\varphi_0 = \pi$ .

**Задача 27.18.**

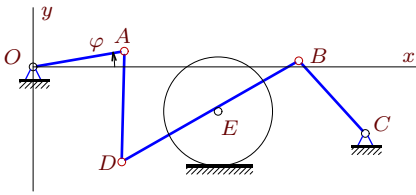
3



$\omega_{BC_z} = 25$  рад/с,  $OA = 25$ ,  
 $AB = 10$ ,  $BC = 12$ ,  $AD = 13$ ,  
 $x_C = 11$ ,  $y_C = -32$ ,  $y_D = -19$ ,  
 $\varphi_0 = \pi$ .

**Задача 27.19.**

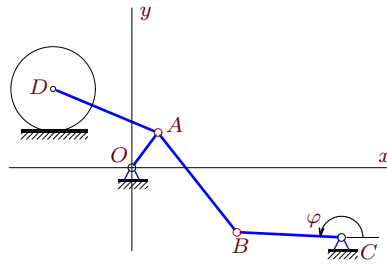
3



$\omega_{OA_z} = 15$  рад/с,  $BC=10$ ,  
 $DE = BE = 10$ ,  $OA = 8$ ,  
 $AD = 10$ ,  $x_C = 30$ ,  $y_C = -6$ ,  
 $y_E = -4$ ,  $\varphi_0 = 0$ .

**Задача 27.20.**

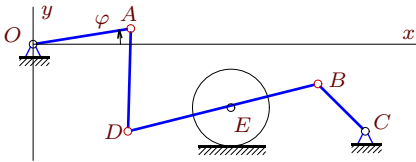
3



$v_{Dx} = -63$  см/с,  $OA = 5$ ,  
 $AB = 15$ ,  $BC = 12$ ,  $AD = 13$ ,  
 $x_C = 24$ ,  $y_C = -8$ ,  $y_D = 9$ ,  
 $\varphi_0 = \pi$ .

**Задача 27.21.**

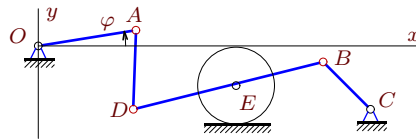
3



$\omega_{OA_z} = 13$  рад/с,  $BC=10$ ,  
 $DE = BE = 13$ ,  $OA = 12$ ,  
 $AD = 13$ ,  $x_C = 42$ ,  $y_C = -11$ ,  
 $y_E = -8$ ,  $\varphi_0 = 0$ .

**Задача 27.22.**

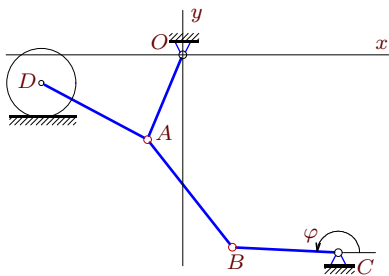
3



$v_{Ex} = -105$  см/с,  $BC=10$ ,  
 $DE = BE = 13$ ,  $OA = 12$ ,  
 $AD = 10$ ,  $x_C = 42$ ,  $y_C = -8$ ,  
 $y_E = -5$ ,  $\varphi_0 = 0$ .

**Задача 27.23.**

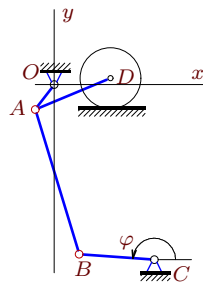
3



$\omega_{BC_z} = -56$  рад/с,  $OA = 13$ ,  
 $AB = 20$ ,  $BC = 15$ ,  $AD = 17$ ,  
 $x_C = 22$ ,  $y_C = -28$ ,  $y_D = -4$ ,  
 $\varphi_0 = \pi$ .

**Задача 27.24.**

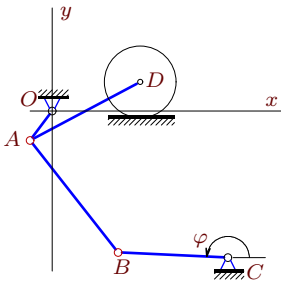
3



$\omega_{OA_z} = 72$  рад/с,  $OA = 5$ ,  
 $AB = 25$ ,  $BC = 12$ ,  $AD = 13$ ,  
 $x_C = 16$ ,  $y_C = -28$ ,  $y_D = 1$ ,  
 $\varphi_0 = \pi$ .

**Задача 27.25.**

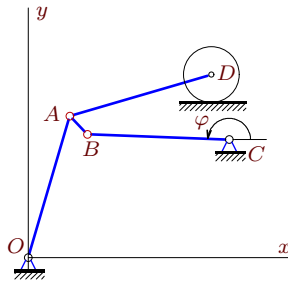
3



$v_{Dx} = -48$  см/с,  $OA = 5$ ,  
 $AB = 20$ ,  $BC = 15$ ,  $AD = 17$ ,  
 $x_C = 24$ ,  $y_C = -20$ ,  $y_D = 4$ ,  
 $\varphi_0 = \pi$ .

**Задача 27.26.**

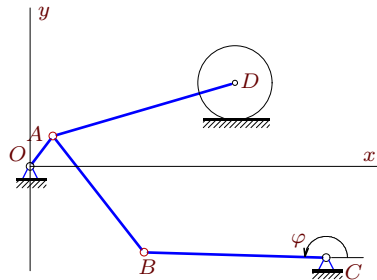
3



$\omega_{BCz} = -25$  рад/с,  $OA = 25$ ,  
 $AB = 5$ ,  $BC = 24$ ,  $AD = 25$ ,  
 $x_C = 34$ ,  $y_C = 20$ ,  $y_D = 31$ ,  
 $\varphi_0 = \pi$ .

**Задача 27.27.**

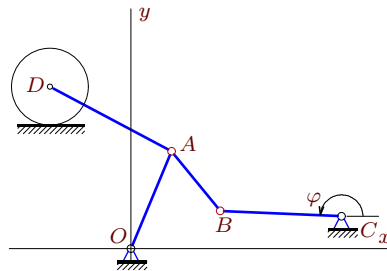
3



$\omega_{OA_z} = 8$  рад/с,  $OA = 5$ ,  
 $AB = 20$ ,  $BC = 24$ ,  $AD = 25$ ,  
 $x_C = 39$ ,  $y_C = -12$ ,  $y_D = 11$ ,  
 $\varphi_0 = \pi$ .

**Задача 27.28.**

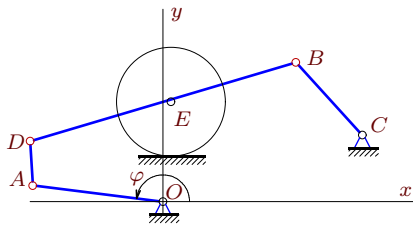
3



$v_{Dx} = -440$  см/с,  $OA = 13$ ,  
 $AB = 10$ ,  $BC = 15$ ,  $AD = 17$ ,  
 $x_C = 26$ ,  $y_C = 4$ ,  $y_D = 20$ ,  
 $\varphi_0 = \pi$ .

**Задача 27.29.**

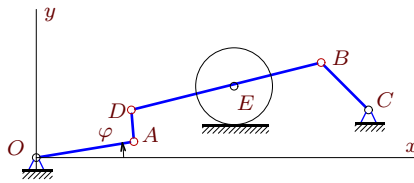
3



$v_{Ex} = -42$  см/с,  $BC=10$ ,  
 $DE = BE = 13$ ,  $OA = 12$ ,  
 $AD = 4$ ,  $x_C = 18$ ,  $y_C = 6$ ,  
 $y_E = 9$ ,  $\varphi_0 = \pi$ .

**Задача 27.30.**

3



$v_{Ex} = -42$  см/с,  $BC=10$ ,  
 $DE = BE = 13$ ,  $OA = 12$ ,  
 $AD = 4$ ,  $x_C = 42$ ,  $y_C = 6$ ,  
 $y_E = 9$ ,  $\varphi_0 = 0$ .

**Кинематический анализ плоского механизма (2)**

№	$\omega_{OA_z}$	$\omega_{AB_z}$	$\omega_{BC_z}$	$\omega_{AD_z}$	$\omega_{BD_z}$	$v_{Dx}$	$v_{Ex}$
1	-8	-	-	-13	-8	-	-168
2	2	-	4	13	-2	-	-
3	-	-	6	13	-3	-	-63
4	-45	60	-	-36	-	432	-
5	-	-24	25	-18	-	-702	-
6	-	-	6	13	-3	-	-63
7	-	-	6	13	-3	-	-63
8	8	-12	-	5	-	-66	-
9	-	-	10	26	-5	-	-105
10	-	-	4	13	-2	-	-42
11	-	-60	77	32	-	-288	-
12	15	45	-	-5	-	140	-
13	-	8	-14	9	-	150	-
14	-15	-	-	-26	-15	-	-315
15	-45	15	-	9	-	252	-
16	-	-8	6	-3	-	-117	-
17	-40	-32	-	-25	-	-630	-
18	12	-36	-	7	-	-253	-
19	-	-	20	-34	-15	-	-250
20	-12	-4	6	-3	-	-	-
21	-	-	26	-26	-13	-	-273
22	5	-	10	-13	-5	-	-
23	-60	45	-	20	-	880	-
24	-	-12	25	18	-	-198	-
25	20	-5	8	4	-	-	-
26	24	144	-	-7	-	527	-
27	-	2	-2	-1	-	25	-
28	-30	-45	28	-10	-	-	-
29	-2	-	4	13	-2	-	-
30	2	-	4	13	-2	-	-