

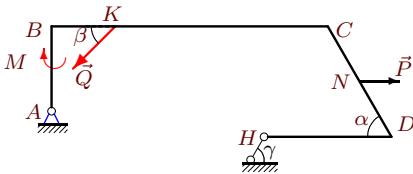
## Определение реакций опор рамы

Тяжелая однородная рама расположена в вертикальной плоскости и опирается на неподвижный шарнир  $A$  и наклонный невесомый стержень  $H$ . К раме приложены горизонтальная сила  $P$ , наклонная сила  $Q$  и момент  $M$ . Учитывая погонный вес рамы  $\rho$ , найти реакции опор.

Кирсанов М.Н. **Решебник. Теоретическая механика**/Под ред. А. И. Кириллова.– М.: ФИЗМАТЛИТ, 2008. — 384 с. (с.31.)

### Задача S4.1.

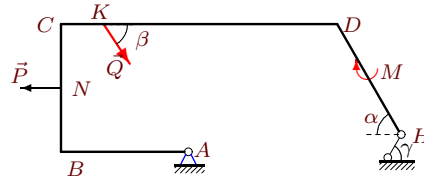
10



$\rho = 2$  кН/м,  $P = 7$  кН,  $Q = 32$  кН,  
 $M = 20$  кНм,  $\alpha = 60^\circ$ ,  $\beta = 45^\circ$ ,  $\gamma = 45^\circ$ ,  
 $AB = 4$  м,  $BC = 13$  м,  $CD = 6$  м,  
 $DH = 6$  м,  $BK = 3$  м,  $CN = 3$  м.

### Задача S4.2.

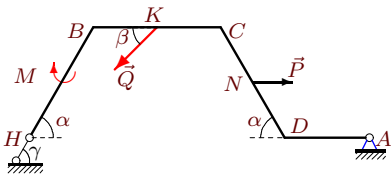
10



$\rho = 1$  кН/м,  $P = 7$  кН,  $Q = 30$  кН,  
 $M = 15$  кНм,  $\alpha = 60^\circ$ ,  $\beta = 60^\circ$ ,  $\gamma = 30^\circ$ ,  
 $AB = 6$  м,  $BC = 6$  м,  $CD = 13$  м,  
 $DH = 6$  м,  $CK = 2$  м,  $CN = 3$  м.

### Задача S4.3.

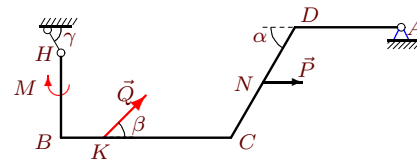
10



$\rho = 3$  кН/м,  $P = 8$  кН,  $Q = 26$  кН,  
 $M = 25$  кНм,  $\alpha = 60^\circ$ ,  $\beta = 45^\circ$ ,  $\gamma = 60^\circ$ ,  
 $HB = 6$  м,  $BC = 6$  м,  $CD = 6$  м,  
 $DA = 4$  м,  $BK = 3$  м,  $CN = 3$  м.

### Задача S4.4.

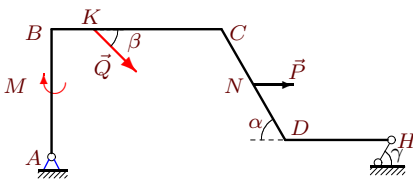
10



$\rho = 3$  кН/м,  $P = 7$  кН,  $Q = 33$  кН,  
 $M = 25$  кНм,  $\alpha = 60^\circ$ ,  $\beta = 30^\circ$ ,  $\gamma = 60^\circ$ ,  
 $HB = 4$  м,  $BC = 8$  м,  $CD = 6$  м,  
 $DA = 5$  м,  $BK = 2$  м,  $CN = 3$  м.

### Задача S4.5.

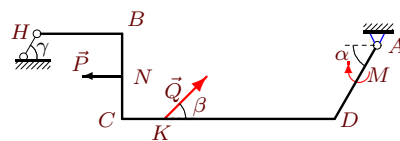
10



$\rho = 2$  кН/м,  $P = 7$  кН,  $Q = 29$  кН,  
 $M = 20$  кНм,  $\alpha = 60^\circ$ ,  $\beta = 45^\circ$ ,  $\gamma = 45^\circ$ ,  
 $AB = 6$  м,  $BC = 8$  м,  $CD = 6$  м,  
 $DH = 5$  м,  $BK = 2$  м,  $CN = 3$  м.

### Задача S4.6.

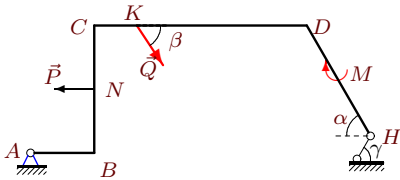
10



$\rho = 3$  кН/м,  $P = 8$  кН,  $Q = 34$  кН,  
 $M = 25$  кНм,  $\alpha = 60^\circ$ ,  $\beta = 45^\circ$ ,  $\gamma = 60^\circ$ ,  
 $HB = 4$  м,  $BC = 4$  м,  $CD = 10$  м,  
 $DA = 4$  м,  $CK = 2$  м,  $CN = 2$  м.

**Задача S4.7.**

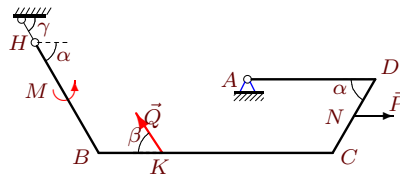
10



$\rho = 2 \text{ кН/м}$ ,  $P = 8 \text{ кН}$ ,  $Q = 35 \text{ кН}$ ,  
 $M = 20 \text{ кНм}$ ,  $\alpha = 60^\circ$ ,  $\beta = 60^\circ$ ,  $\gamma = 45^\circ$ ,  
 $AB = 3 \text{ м}$ ,  $BC = 6 \text{ м}$ ,  $CD = 10 \text{ м}$ ,  
 $DH = 6 \text{ м}$ ,  $CK = 2 \text{ м}$ ,  $CN = 3 \text{ м}$ .

**Задача S4.8.**

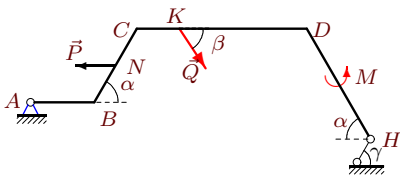
10



$\rho = 3 \text{ кН/м}$ ,  $P = 9 \text{ кН}$ ,  $Q = 17 \text{ кН}$ ,  
 $M = 70 \text{ кНм}$ ,  $\alpha = 60^\circ$ ,  $\beta = 60^\circ$ ,  $\gamma = 60^\circ$ ,  
 $HB = 6 \text{ м}$ ,  $BC = 11 \text{ м}$ ,  $CD = 4 \text{ м}$ ,  
 $DA = 6 \text{ м}$ ,  $BK = 3 \text{ м}$ ,  $CN = 2 \text{ м}$ .

**Задача S4.9.**

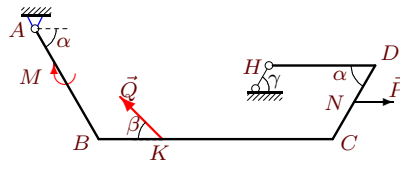
10



$\rho = 1 \text{ кН/м}$ ,  $P = 7 \text{ кН}$ ,  $Q = 17 \text{ кН}$ ,  
 $M = 30 \text{ кНм}$ ,  $\alpha = 60^\circ$ ,  $\beta = 60^\circ$ ,  $\gamma = 30^\circ$ ,  
 $AB = 3 \text{ м}$ ,  $BC = 4 \text{ м}$ ,  $CD = 8 \text{ м}$ ,  
 $DH = 6 \text{ м}$ ,  $CK = 2 \text{ м}$ ,  $CN = 2 \text{ м}$ .

**Задача S4.10.**

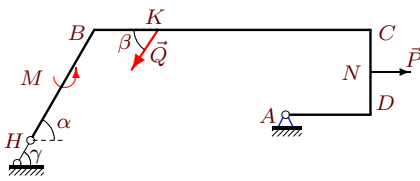
10



$\rho = 2 \text{ кН/м}$ ,  $P = 7 \text{ кН}$ ,  $Q = 24 \text{ кН}$ ,  
 $M = 20 \text{ кНм}$ ,  $\alpha = 60^\circ$ ,  $\beta = 45^\circ$ ,  $\gamma = 45^\circ$ ,  
 $AB = 6 \text{ м}$ ,  $BC = 11 \text{ м}$ ,  $CD = 4 \text{ м}$ ,  
 $DH = 5 \text{ м}$ ,  $BK = 3 \text{ м}$ ,  $CN = 2 \text{ м}$ .

**Задача S4.11.**

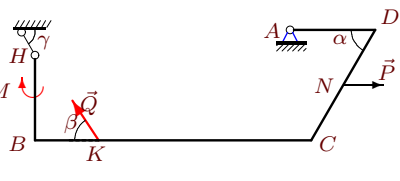
10



$\rho = 3 \text{ кН/м}$ ,  $P = 9 \text{ кН}$ ,  $Q = 15 \text{ кН}$ ,  
 $M = 70 \text{ кНм}$ ,  $\alpha = 60^\circ$ ,  $\beta = 60^\circ$ ,  $\gamma = 60^\circ$ ,  
 $HB = 6 \text{ м}$ ,  $BC = 13 \text{ м}$ ,  $CD = 4 \text{ м}$ ,  
 $DA = 4 \text{ м}$ ,  $BK = 3 \text{ м}$ ,  $CN = 2 \text{ м}$ .

**Задача S4.12.**

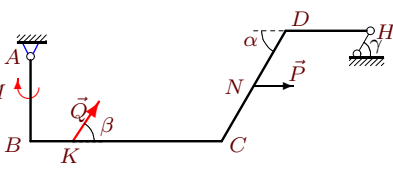
10



$\rho = 3 \text{ кН/м}$ ,  $P = 9 \text{ кН}$ ,  $Q = 34 \text{ кН}$ ,  
 $M = 25 \text{ кНм}$ ,  $\alpha = 60^\circ$ ,  $\beta = 60^\circ$ ,  $\gamma = 60^\circ$ ,  
 $HB = 4 \text{ м}$ ,  $BC = 13 \text{ м}$ ,  $CD = 6 \text{ м}$ ,  
 $DA = 4 \text{ м}$ ,  $BK = 3 \text{ м}$ ,  $CN = 3 \text{ м}$ .

**Задача S4.13.**

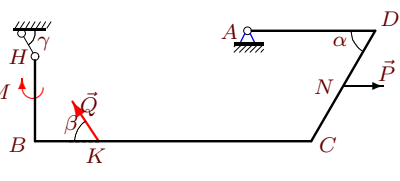
10



$\rho = 1 \text{ кН/м}$ ,  $P = 7 \text{ кН}$ ,  $Q = 33 \text{ кН}$ ,  
 $M = 15 \text{ кНм}$ ,  $\alpha = 60^\circ$ ,  $\beta = 60^\circ$ ,  $\gamma = 30^\circ$ ,  
 $AB = 4 \text{ м}$ ,  $BC = 9 \text{ м}$ ,  $CD = 6 \text{ м}$ ,  
 $DH = 4 \text{ м}$ ,  $BK = 2 \text{ м}$ ,  $CN = 3 \text{ м}$ .

**Задача S4.14.**

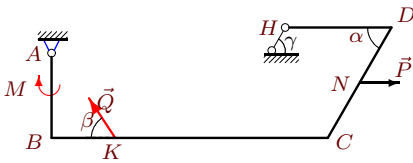
10



$\rho = 3 \text{ кН/м}$ ,  $P = 9 \text{ кН}$ ,  $Q = 30 \text{ кН}$ ,  
 $M = 25 \text{ кНм}$ ,  $\alpha = 60^\circ$ ,  $\beta = 60^\circ$ ,  $\gamma = 60^\circ$ ,  
 $HB = 4 \text{ м}$ ,  $BC = 13 \text{ м}$ ,  $CD = 6 \text{ м}$ ,  
 $DA = 6 \text{ м}$ ,  $BK = 3 \text{ м}$ ,  $CN = 3 \text{ м}$ .

**Задача S4.15.**

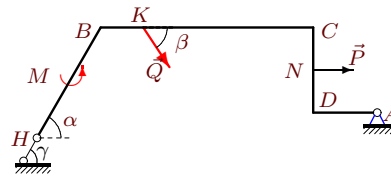
10



$\rho = 1 \text{ кН/м}$ ,  $P = 7 \text{ кН}$ ,  $Q = 30 \text{ кН}$ ,  
 $M = 15 \text{ кНм}$ ,  $\alpha = 60^\circ$ ,  $\beta = 60^\circ$ ,  $\gamma = 30^\circ$ ,  
 $AB = 4 \text{ м}$ ,  $BC = 13 \text{ м}$ ,  $CD = 6 \text{ м}$ ,  
 $DH = 5 \text{ м}$ ,  $BK = 3 \text{ м}$ ,  $CN = 3 \text{ м}$ .

**Задача S4.16.**

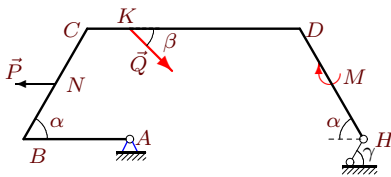
10



$\rho = 3 \text{ кН/м}$ ,  $P = 9 \text{ кН}$ ,  $Q = 13 \text{ кН}$ ,  
 $M = 70 \text{ кНм}$ ,  $\alpha = 60^\circ$ ,  $\beta = 60^\circ$ ,  $\gamma = 60^\circ$ ,  
 $HB = 6 \text{ м}$ ,  $BC = 10 \text{ м}$ ,  $CD = 4 \text{ м}$ ,  
 $DA = 3 \text{ м}$ ,  $BK = 2 \text{ м}$ ,  $CN = 2 \text{ м}$ .

**Задача S4.17.**

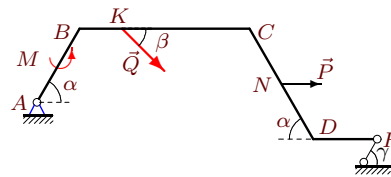
10



$\rho = 2 \text{ кН/м}$ ,  $P = 6 \text{ кН}$ ,  $Q = 23 \text{ кН}$ ,  
 $M = 20 \text{ кНм}$ ,  $\alpha = 60^\circ$ ,  $\beta = 30^\circ$ ,  $\gamma = 45^\circ$ ,  
 $AB = 5 \text{ м}$ ,  $BC = 6 \text{ м}$ ,  $CD = 10 \text{ м}$ ,  
 $DH = 6 \text{ м}$ ,  $CK = 2 \text{ м}$ ,  $CN = 3 \text{ м}$ .

**Задача S4.18.**

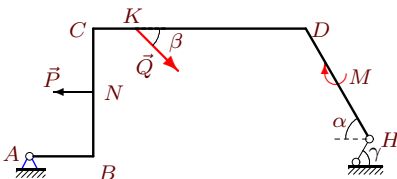
10



$\rho = 1 \text{ кН/м}$ ,  $P = 5 \text{ кН}$ ,  $Q = 17 \text{ кН}$ ,  
 $M = 30 \text{ кНм}$ ,  $\alpha = 60^\circ$ ,  $\beta = 30^\circ$ ,  $\gamma = 30^\circ$ ,  
 $AB = 4 \text{ м}$ ,  $BC = 8 \text{ м}$ ,  $CD = 6 \text{ м}$ ,  
 $DH = 3 \text{ м}$ ,  $BK = 2 \text{ м}$ ,  $CN = 3 \text{ м}$ .

**Задача S4.19.**

10



$\rho = 1 \text{ кН/м}$ ,  $P = 6 \text{ кН}$ ,  $Q = 33 \text{ кН}$ ,  
 $M = 15 \text{ кНм}$ ,  $\alpha = 60^\circ$ ,  $\beta = 45^\circ$ ,  $\gamma = 30^\circ$ ,  
 $AB = 3 \text{ м}$ ,  $BC = 6 \text{ м}$ ,  $CD = 10 \text{ м}$ ,  
 $DH = 6 \text{ м}$ ,  $CK = 2 \text{ м}$ ,  $CN = 3 \text{ м}$ .

**Задача S4.20.**

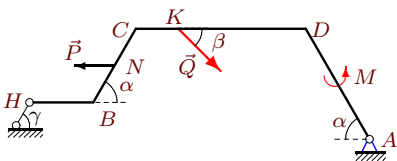
10



$\rho = 2 \text{ кН/м}$ ,  $P = 8 \text{ кН}$ ,  $Q = 30 \text{ кН}$ ,  
 $M = 20 \text{ кНм}$ ,  $\alpha = 60^\circ$ ,  $\beta = 60^\circ$ ,  $\gamma = 45^\circ$ ,  
 $AB = 4 \text{ м}$ ,  $BC = 14 \text{ м}$ ,  $CD = 4 \text{ м}$ ,  
 $DH = 4 \text{ м}$ ,  $BK = 3 \text{ м}$ ,  $CN = 2 \text{ м}$ .

**Задача S4.21.**

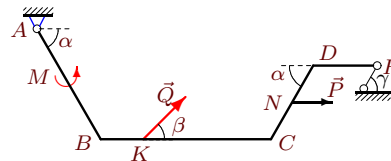
10



$\rho = 3 \text{ кН/м}$ ,  $P = 8 \text{ кН}$ ,  $Q = 18 \text{ кН}$ ,  
 $M = 70 \text{ кНм}$ ,  $\alpha = 60^\circ$ ,  $\beta = 45^\circ$ ,  $\gamma = 60^\circ$ ,  
 $HB = 3 \text{ м}$ ,  $BC = 4 \text{ м}$ ,  $CD = 8 \text{ м}$ ,  
 $DA = 6 \text{ м}$ ,  $CK = 2 \text{ м}$ ,  $CN = 2 \text{ м}$ .

**Задача S4.22.**

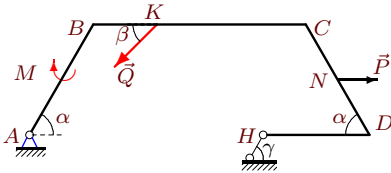
10



$\rho = 2 \text{ кН/м}$ ,  $P = 6 \text{ кН}$ ,  $Q = 21 \text{ кН}$ ,  
 $M = 50 \text{ кНм}$ ,  $\alpha = 60^\circ$ ,  $\beta = 30^\circ$ ,  $\gamma = 45^\circ$ ,  
 $AB = 6 \text{ м}$ ,  $BC = 8 \text{ м}$ ,  $CD = 4 \text{ м}$ ,  
 $DH = 3 \text{ м}$ ,  $BK = 2 \text{ м}$ ,  $CN = 2 \text{ м}$ .

**Задача S4.23.**

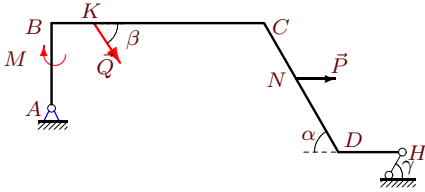
10



$\rho = 1 \text{ кН/м}$ ,  $P = 6 \text{ кН}$ ,  $Q = 26 \text{ кН}$ ,  
 $M = 15 \text{ кНм}$ ,  $\alpha = 60^\circ$ ,  $\beta = 45^\circ$ ,  $\gamma = 30^\circ$ ,  
 $AB = 6 \text{ м}$ ,  $BC = 10 \text{ м}$ ,  $CD = 6 \text{ м}$ ,  
 $DH = 5 \text{ м}$ ,  $BK = 3 \text{ м}$ ,  $CN = 3 \text{ м}$ .

**Задача S4.25.**

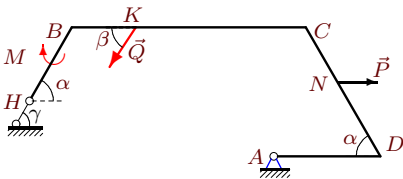
10



$\rho = 1 \text{ кН/м}$ ,  $P = 7 \text{ кН}$ ,  $Q = 30 \text{ кН}$ ,  
 $M = 15 \text{ кНм}$ ,  $\alpha = 60^\circ$ ,  $\beta = 60^\circ$ ,  $\gamma = 30^\circ$ ,  
 $AB = 4 \text{ м}$ ,  $BC = 10 \text{ м}$ ,  $CD = 7 \text{ м}$ ,  
 $DH = 3 \text{ м}$ ,  $BK = 2 \text{ м}$ ,  $CN = 3 \text{ м}$ .

**Задача S4.27.**

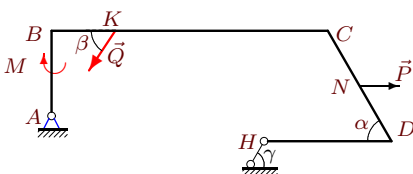
10



$\rho = 3 \text{ кН/м}$ ,  $P = 9 \text{ кН}$ ,  $Q = 24 \text{ кН}$ ,  
 $M = 25 \text{ кНм}$ ,  $\alpha = 60^\circ$ ,  $\beta = 60^\circ$ ,  $\gamma = 60^\circ$ ,  
 $HB = 4 \text{ м}$ ,  $BC = 11 \text{ м}$ ,  $CD = 7 \text{ м}$ ,  
 $DA = 5 \text{ м}$ ,  $BK = 3 \text{ м}$ ,  $CN = 3 \text{ м}$ .

**Задача S4.29.**


10



$\rho = 2 \text{ кН/м}$ ,  $P = 8 \text{ кН}$ ,  $Q = 30 \text{ кН}$ ,  
 $M = 20 \text{ кНм}$ ,  $\alpha = 60^\circ$ ,  $\beta = 60^\circ$ ,  $\gamma = 45^\circ$ ,  
 $AB = 4 \text{ м}$ ,  $BC = 13 \text{ м}$ ,  $CD = 6 \text{ м}$ ,  
 $DH = 6 \text{ м}$ ,  $BK = 3 \text{ м}$ ,  $CN = 3 \text{ м}$ .

**Задача S4.24.**

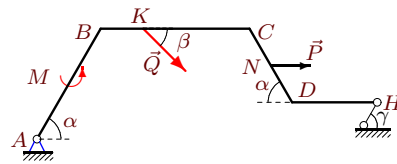
10



$\rho = 1 \text{ кН/м}$ ,  $P = 7 \text{ кН}$ ,  $Q = 35 \text{ кН}$ ,  
 $M = 15 \text{ кНм}$ ,  $\alpha = 60^\circ$ ,  $\beta = 60^\circ$ ,  $\gamma = 30^\circ$ ,  
 $AB = 4 \text{ м}$ ,  $BC = 14 \text{ м}$ ,  $CD = 4 \text{ м}$ ,  
 $DH = 5 \text{ м}$ ,  $BK = 3 \text{ м}$ ,  $CN = 2 \text{ м}$ .

**Задача S4.26.**

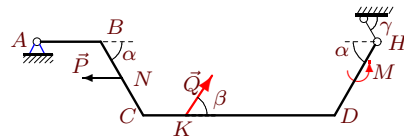
10



$\rho = 1 \text{ кН/м}$ ,  $P = 5 \text{ кН}$ ,  $Q = 18 \text{ кН}$ ,  
 $M = 30 \text{ кНм}$ ,  $\alpha = 60^\circ$ ,  $\beta = 30^\circ$ ,  $\gamma = 30^\circ$ ,  
 $AB = 6 \text{ м}$ ,  $BC = 7 \text{ м}$ ,  $CD = 4 \text{ м}$ ,  
 $DH = 4 \text{ м}$ ,  $BK = 2 \text{ м}$ ,  $CN = 2 \text{ м}$ .

**Задача S4.28.**

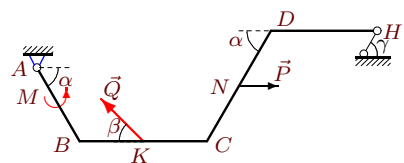
10



$\rho = 1 \text{ кН/м}$ ,  $P = 7 \text{ кН}$ ,  $Q = 17 \text{ кН}$ ,  
 $M = 30 \text{ кНм}$ ,  $\alpha = 60^\circ$ ,  $\beta = 60^\circ$ ,  $\gamma = 30^\circ$ ,  
 $AB = 3 \text{ м}$ ,  $BC = 4 \text{ м}$ ,  $CD = 9 \text{ м}$ ,  
 $DH = 4 \text{ м}$ ,  $CK = 2 \text{ м}$ ,  $CN = 2 \text{ м}$ .

**Задача S4.30.**

10



$\rho = 1 \text{ кН/м}$ ,  $P = 5 \text{ кН}$ ,  $Q = 19 \text{ кН}$ ,  
 $M = 30 \text{ кНм}$ ,  $\alpha = 60^\circ$ ,  $\beta = 30^\circ$ ,  $\gamma = 30^\circ$ ,  
 $AB = 4 \text{ м}$ ,  $BC = 6 \text{ м}$ ,  $CD = 6 \text{ м}$ ,  
 $DH = 5 \text{ м}$ ,  $BK = 3 \text{ м}$ ,  $CN = 3 \text{ м}$ .

**S4 Ответы.**  
**Определение реакций опор рамы**

04.03.2012

	$M_A(Q)$	$M_A(P)$	$\sum_k M_A(G_k)$	$h$	$X_A$	$Y_A$	$R_H$
1	22.627	-9.813	-499.0	7.917	-29.583	35.417	63.938
2	13.923	21.000	-3.5	4.304	-4.695	58.889	-3.816
3	279.378	-20.785	564.0	-13.856	-18.396	34.535	57.561
4	-82.500	18.187	634.5	-14.454	-16.720	19.836	37.717
5	-164.049	-23.813	-313.0	10.745	-61.782	36.230	48.473
6	-157.134	-11.713	534.0	-14.124	-28.083	21.102	24.083
7	-256.554	24.000	-379.0	10.745	-51.060	38.751	58.775
8	-88.335	15.588	88.5	-7.794	5.001	56.749	11.002
9	-132.502	12.124	-179.5	9.500	-26.102	21.518	28.408
10	13.642	24.249	-460.0	9.003	-24.754	0.305	49.107
11	107.942	-18.000	214.5	-9.794	-20.615	60.881	38.231
12	-353.338	23.383	289.5	-10.990	5.022	56.713	-5.956
13	123.158	9.813	-159.5	6.964	-28.664	-8.560	5.963
14	-259.808	23.383	121.5	-9.258	-1.557	74.108	-15.113
15	17.942	9.813	-239.0	4.464	-35.891	-23.321	50.681
16	97.842	-18.000	550.5	-13.258	-41.911	34.512	52.823
17	-103.500	15.588	-107.0	7.778	-33.456	45.963	27.630
18	-85.000	-4.330	-164.5	9.500	-40.127	17.719	23.561
19	-256.680	18.000	-189.5	7.304	-69.883	17.996	60.678
20	17.942	18.144	-428.0	8.864	-25.859	-6.840	46.469
21	48.415	27.713	469.5	-14.722	-25.636	39.515	41.816
22	147.000	20.785	-313.0	12.538	-29.556	26.130	7.594
23	-14.779	-15.588	-243.5	5.500	-33.100	19.124	52.521
24	20.933	15.876	-225.5	5.964	-19.077	-20.387	34.153
25	-111.962	-9.813	-177.3	10.036	-49.098	34.336	31.290
26	-126.000	-17.321	-154.5	6.500	-56.271	9.398	41.203
27	207.846	-31.177	152.3	-11.258	-10.498	78.406	26.995
28	132.502	-12.124	-166.0	8.000	0.191	4.301	1.953
29	-17.942	-11.215	-499.0	7.917	-41.959	35.021	69.239
30	-9.500	4.330	-158.5	6.500	-6.355	1.218	20.565

S4 файл о4s10B